

Name _____

Use Symbols to Compare Numbers

Go Online

Interactive Examples

Compare the numbers. Write $>$, $<$, or $=$.

1. 489
605

489 ○ 605

2. 719
719

719 ○ 719

3. 370
248

370 ○ 248

4. 645
654

645 ○ 654

5. 205
250

205 ○ 250

6. 813
781


813 ○ 781

Problem Solving

Solve. Write or draw to explain.

7. Levi has 178 pennies.
Bella has 190 pennies.
Who has more pennies?

_____ has more pennies.

8.  Explain how comparing 645 and 738 is different from comparing 645 and 649.

Lesson Check

9. Write $>$, $<$, or $=$ to compare.

$$315 \bigcirc 351$$

10. Write $>$, $<$, or $=$ to compare.

$$401 \bigcirc 399$$

Spiral Review

11. What number has the same value as 50 tens?

12. Write a number with an 8 in the hundreds place.

13. Write the number of hundreds, tens, and ones.

473

_____ hundreds

_____ tens

_____ ones

14. Count back by 100. Write the unknown number.

600, 500, _____, 300, 200

Order Numbers

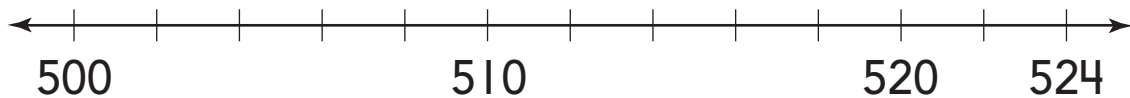
Go Online

Interactive Examples

Compare the numbers. Write them in order from least to greatest. Plot the numbers on the number lines.

1. 513
523
503

_____ ○ _____ ○ _____
least greatest



2. 656
566
665

_____ ○ _____ ○ _____
least greatest



Problem Solving

Solve. Write or draw to explain.

3. Mehdi has 3 boxes of wrapping paper with 135 rolls, 250 rolls, and 160 rolls. Write the numbers in order from greatest to least. Remember to write comparison symbols.

_____ ○ _____ ○ _____

Which number is between the other two? _____

Lesson Check

4. Which of these numbers is the least?

- four hundred twenty-six
 - $400 + 20 + 4$
 - 472
-

5. Karen scores 512 points. Josh scores 491 points. Emily scores 611 points. Which of these is true?

- $611 < 491 < 512$
 - $611 < 512 < 491$
 - $491 < 512 < 611$
-

6. Jasper, Harold, and Bella are bunnies at a zoo. Jasper eats 103 carrots. Harold eats 158 carrots. Bella eats 124 carrots. Which bunny eats the most carrots?

.....

Spiral Review

7. 40 tens = _____ hundreds

.....

8. 50 ones = _____ tens

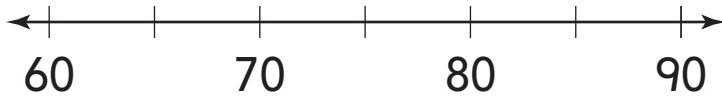
Name _____

Round Numbers

Go Online

Interactive Examples

Use the number line to round 73 to the nearest ten.




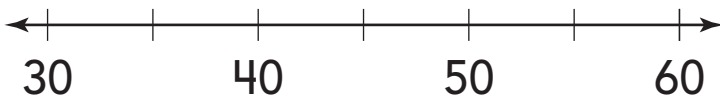
1. 73 is between ____ and ____.
2. 73 is closer to ____.
3. 73 rounded to the nearest ten is ____.

Round to the nearest ten.

4. 56 ____
5. 9 ____
6. 25 ____
7. 63 ____
8. 72 ____
9. 45 ____

10. A dog weighs 35 pounds. What is its weight rounded to the nearest ten pounds?

11.  **Math** Explain how to round 47 to the nearest ten using the number line.



Lesson Check

12. One day, 58 people visited the Monkey House at the zoo. What is 58 rounded to the nearest ten?

13. Sami ordered 32 dresses for her store. What is 32 rounded to the nearest ten?

Spiral Review

14. Write how many tens. Write how many hundreds.
Write the number.



_____ tens

_____ hundreds



15. Write 638 as hundreds, tens, and ones.

_____ hundreds _____ tens

_____ ones

16. Write 705 in words.
