

Name _____

Count On and Count Back by 10 and 100

Go Online

Interactive Examples

Write the number.

1. 10 more than 451

2. 10 less than 770

3. 100 more than 367

4. 100 less than 895

5. 10 less than 812

6. 100 more than 543

7. 10 more than 218


8. 100 more than 379

Problem Solving

Solve. Write or draw to explain.

9. Sarai has 128 stickers. Alex has 10 fewer stickers than Sarai. How many stickers does Alex have?

_____ stickers

10.  Choose any three-digit number. Describe how to find the number that is 10 more.

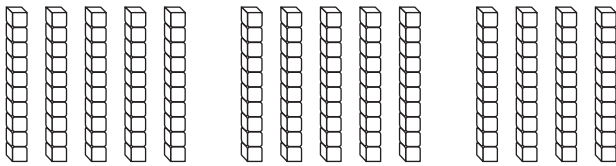
Lesson Check

11. Write the number that is 10 less than 526.

12. Write the number that is 100 more than 487.

Spiral Review

13. Write another way to describe 14 tens.



_____ hundred _____ tens

14. What is the value of the underlined digit?

587

15. What number can be written as $30 + 5$?

16. What number can be written as 9 tens and 1 one?

Name _____

Compare Numbers


Model the numbers. Draw quick pictures to show how you solved the problem.

[Go Online](#)[Interactive Examples](#)

1. Lauryn has 128 marbles. Sefika has 118 marbles. Who has more marbles?

-
2. Nick has 189 trading cards. Kumar has 198 trading cards. Who has fewer cards?

-
3. A piano has 36 black keys and 52 white keys. Are there more black keys or white keys on a piano?

4.  **Math** Draw to show how you can use models to compare 345 and 391.

Lesson Check

5. Chandra has 245 stickers. Circle the number less than 245.

285

254

245

239

6. Malik's book has 176 pages. Circle the number greater than 176.

203

174

168

139

Spiral Review

7. Write 63 as a sum of tens and ones.

_____ + _____

8. Write the number 58 in tens and ones.

_____ tens _____ ones

9. Mr. Ford drove 483 miles during his trip. How many hundreds are in this number?

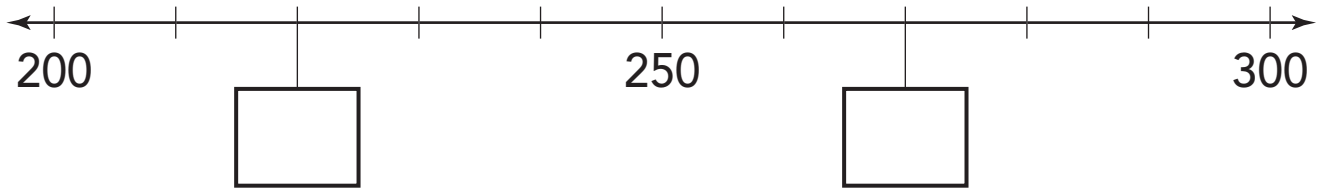
10. Write 20 in words.

Use a Number Line to Compare Numbers

Go Online

Interactive Examples

1. Nino takes 220 steps. Octavia takes 270 steps. Who took fewer steps? Draw and label the points on the number line. Then answer the question.

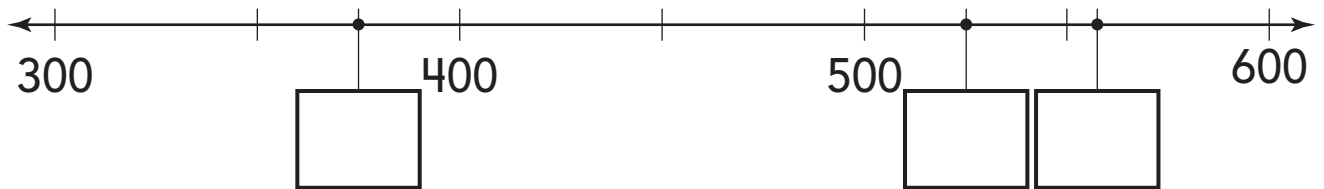


2. On a video game, the first level has 420 coins. The second level has 348 coins, and the third level has 310 coins. Draw and label the points on the number line. Then complete the sentence.



The second level has more coins than the _____ and fewer coins than the _____.

3. There are points on this number line for the numbers 525, 560, and a mystery number. Label all points with numbers.

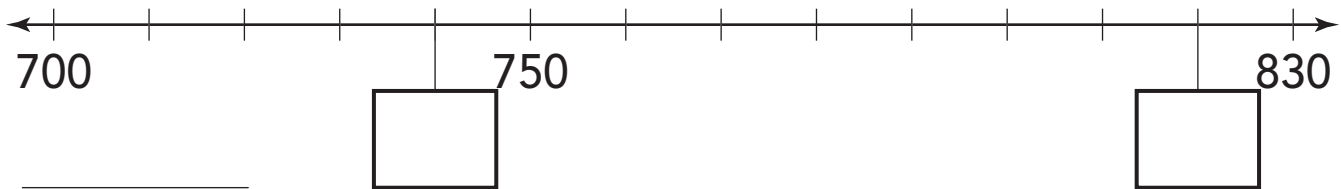


Which number is more than all the others?

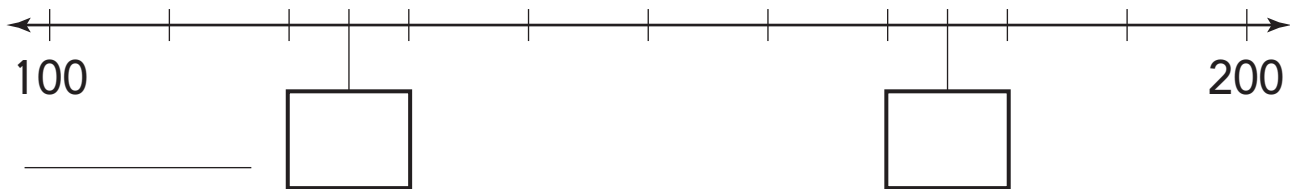
Lesson Check

Draw and label the points on the number lines. Then answer the questions.

4. Johann drove 820 miles. Matthias drove 740 miles.
Who drove more miles?



5. The beach cleanup crew collected 125 bags of garbage in December. They collected 175 bags in January. Which month did the beach cleanup crew collect fewer bags of garbage?



Spiral Review

Write the number.

6. Write the number.
four hundred eighty-six

7. Write the number.
six hundred ninety-three

8. Write the number using words.
175

9. Write the number using words.
529
