

Name \_\_\_\_\_

## Word Form for Numbers

Go Online

Interactive Examples

Write the number.

1. two hundred thirty-two

\_\_\_\_\_

3. one hundred fifty-eight

\_\_\_\_\_

5. four hundred twenty

\_\_\_\_\_

2. five hundred forty-four

\_\_\_\_\_

4. nine hundred fifty

\_\_\_\_\_

6. six hundred seventy-eight

\_\_\_\_\_

Write the number using words.

7. 317

\_\_\_\_\_

### Problem Solving


Circle the answer.

8. Six hundred twenty-six children attend Elm Street School. Which is another way to write this number?

266

626

662

9.  Write a 3-digit number using the digits 5, 9, and 2. Then write your number using words.

\_\_\_\_\_

## Lesson Check

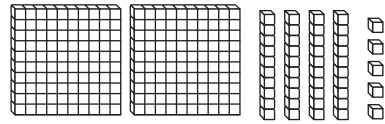
10. Write the number 851 in words.
11. Write the number two hundred sixty using numbers.

---

---

## Spiral Review

12. Write a number with the digit 8 in the tens place.
13. Write the number shown with these blocks.



---

---

14. Count by fives.
15. Tai has 128 marbles. How many hundreds are in this number?

50, 55,

\_\_\_\_, \_\_\_\_\_, \_\_\_\_\_

\_\_\_\_\_ hundred

Name \_\_\_\_\_

## Different Forms of Numbers

Go Online

Interactive Examples

Read the number and draw a quick picture.  
Then write the number in different ways.

1. two hundred fifty-one

\_\_\_\_\_ hundreds \_\_\_\_\_ tens \_\_\_\_\_ one

\_\_\_\_\_ + \_\_\_\_\_ + \_\_\_\_\_

\_\_\_\_\_

2. three hundred twelve

\_\_\_\_\_ hundreds \_\_\_\_\_ ten \_\_\_\_\_ ones

\_\_\_\_\_ + \_\_\_\_\_ + \_\_\_\_\_

\_\_\_\_\_

### Problem Solving


Write the number another way.

3.  $200 + 30 + 7$

\_\_\_\_\_

4. 895

\_\_\_\_\_

5.  Draw a quick picture of 3 hundreds, 5 tens, and 7 ones. What number does your quick picture show? Write it in three different ways.

## Lesson Check

6. Write the number 392 as hundreds, tens, and ones.

\_\_\_\_\_ hundreds \_\_\_\_\_ tens \_\_\_\_\_ ones

7. What is another way to write the number 271?

\_\_\_\_\_ hundreds \_\_\_\_\_ tens \_\_\_\_\_ one

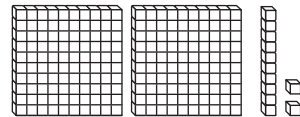
## Spiral Review

8. What is the value of the underlined digit?

56

\_\_\_\_\_

9. What number is shown with these blocks?



\_\_\_\_\_

10. What is another way to write the number 75?

\_\_\_\_\_ + \_\_\_\_\_

11. What number can be written as  $60 + 3$ ?

\_\_\_\_\_

Name \_\_\_\_\_

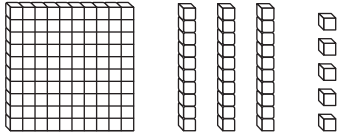
## Different Ways to Show Numbers

Go Online

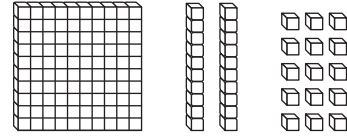
Interactive Examples

Write how many hundreds, tens, and ones are in the visual model.

1. 135



Hundreds	Tens	Ones




Hundreds	Tens	Ones

### Problem Solving

Markers are sold in boxes, packs, or as single markers. Each box has 10 packs. Each pack has 10 markers.

2. Draw pictures to show two ways to buy 276 markers.

3.  **WRITE** Math Draw quick pictures to show the number 326.

## Lesson Check

4. Write the number that can be shown with this many hundreds, tens, and ones.

Hundreds	Tens	Ones
1	2	18

\_\_\_\_\_

5. Write the number that can be shown with this many hundreds, tens, and ones.

Hundreds	Tens	Ones
2	15	6

\_\_\_\_\_

## Spiral Review

6. What number can be written as 6 tens 2 ones?

\_\_\_\_\_

7. What number can be written as  $30 + 2$ ?

\_\_\_\_\_

8. Write the number 584 in words.

\_\_\_\_\_

9. Write the number 29 in words.

\_\_\_\_\_